

U6L5 wkst

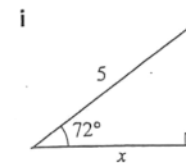
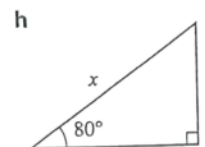
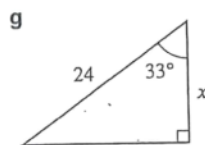
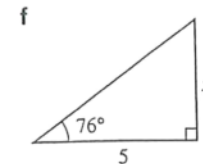
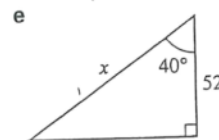
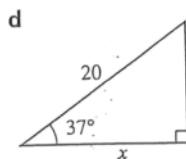
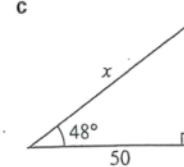
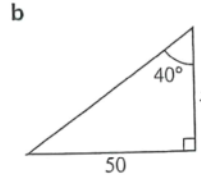
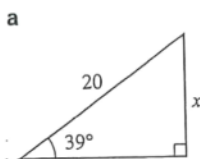
May-13-15 9:38 AM

U6 L5 WKST

TRIGONOMETRY
BIK

EXERCISE 18H

1 Find the length marked x in each of these triangles.



2 Find the angle marked x in each of these triangles.

