

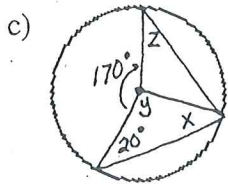
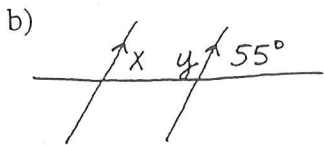
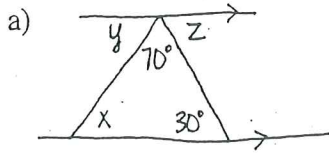
Final Exam Review (pt2)

Math 9

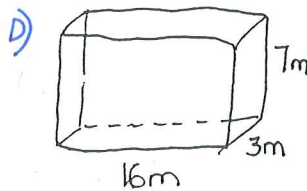
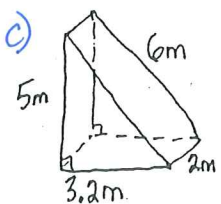
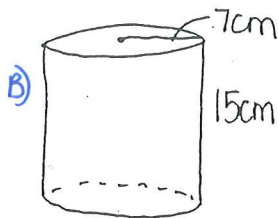
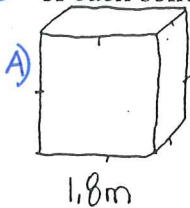
Name: _____

BIK: _____

① In each of the following questions, find the missing angle(s)

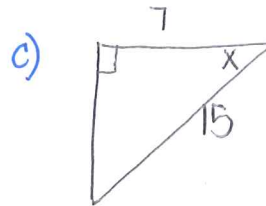
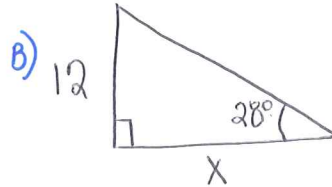
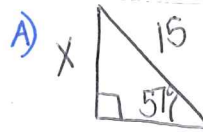


② Determine the Surface Area and Volume of each solid



$\frac{15}{100} = \frac{\square}{100} \%$

③ Solve for the unknown side or angle.



④ Determine the Area of each, to the nearest whole number.

